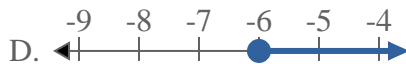
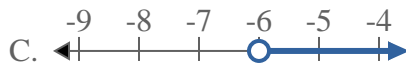




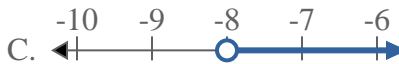
Solve each problem.

Answers

1) Which option best shows $X \leq -6$



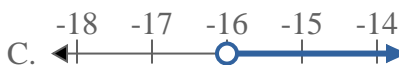
2) Which option best shows $X > -8$



3) Which option best shows $X < 13$



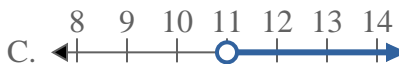
4) Which option best shows $X < -16$



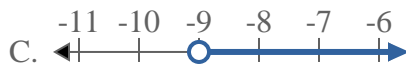
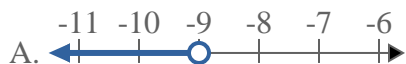
5) Which option best shows $X \leq 11$



6) Which option best shows $X \geq 11$



7) Which option best shows $X > -9$



8) Which option best shows $X \geq -5$

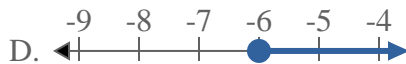
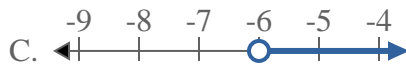


1. _____
2. _____
3. _____
4. _____
5. _____
6. _____
7. _____
8. _____

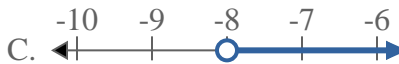


Solve each problem.

1) Which option best shows $X \leq -6$



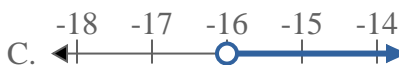
2) Which option best shows $X > -8$



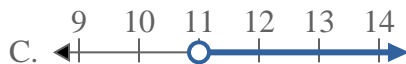
3) Which option best shows $X < 13$



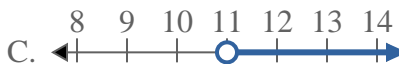
4) Which option best shows $X < -16$



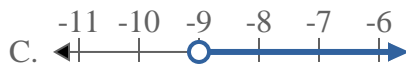
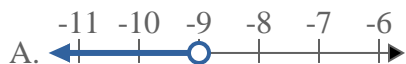
5) Which option best shows $X \leq 11$



6) Which option best shows $X \geq 11$



7) Which option best shows $X > -9$



8) Which option best shows $X \geq -5$



Answers

1. **B**

2. **C**

3. **A**

4. **A**

5. **B**

6. **D**

7. **C**

8. **D**